

Check Your Change

Work out how much change you would get if you bought these items.
Cut out the change, then stick next to the correct item.

You buy

You pay

Your change

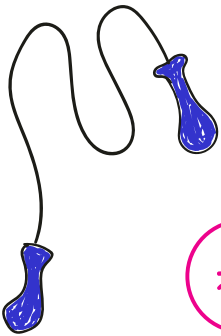
£



£14




£ _____



£7




£ _____



£1



£ _____



£11



£ _____

Check Your Change

You buy

You pay

Your change


£



£25




£ _____



£3



£ _____



£1



£ _____



£17



£ _____

Check Your Change

You buy

You pay

Your change


£



£2




£



£40



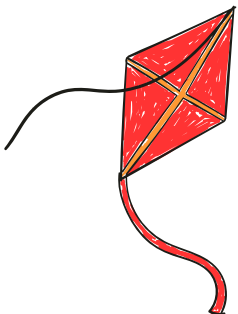
£



£2



£



£9



£

Check Your Change

Cut out the change, then stick next to the correct item.

