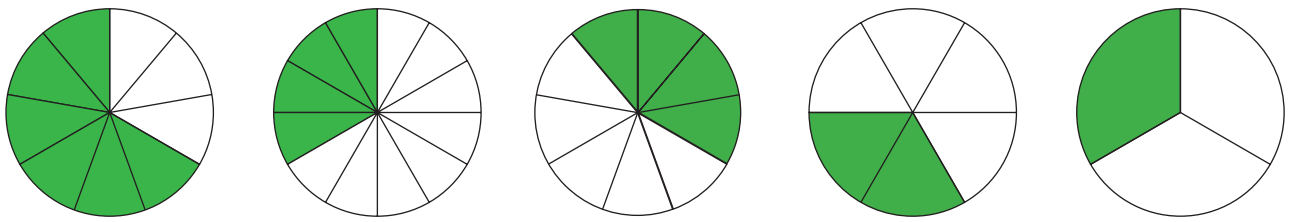
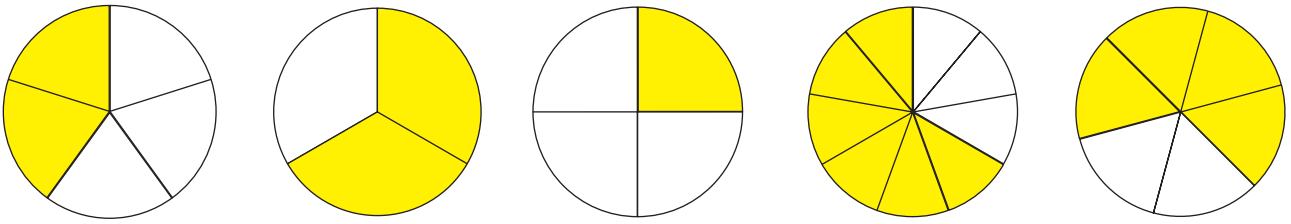
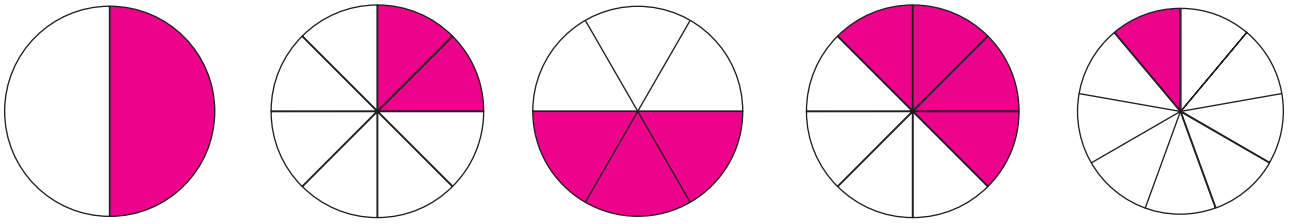


Equivalent Fractions - Find & Circle

Find and circle 3 equivalent fractions in each row.



$$\frac{1}{5}$$

$$\frac{3}{4}$$

$$\frac{2}{10}$$

$$\frac{2}{5}$$

$$\frac{2}{15}$$

$$\frac{3}{15}$$

$$\frac{3}{5}$$

$$\frac{2}{8}$$

$$\frac{1}{4}$$

$$\frac{3}{7}$$

$$\frac{4}{16}$$

$$\frac{6}{8}$$

$$\frac{2}{3}$$

$$\frac{4}{6}$$

$$\frac{3}{7}$$

$$\frac{8}{12}$$

$$\frac{6}{8}$$

$$\frac{1}{5}$$

$$\frac{3}{5}$$

$$\frac{3}{6}$$

$$\frac{1}{3}$$

$$\frac{2}{3}$$

$$\frac{4}{12}$$

$$\frac{2}{6}$$



Equivalent Fractions - Find & Circle (Answers)

Find and circle 3 equivalent fractions in each row.

